

ENTRANCE EXAMINATION-2016

M.A (SOCIAL WORK)

SET B

ROLL NO.

M	1	3	1	6	0	3	0
---	---	---	---	---	---	---	---

Signature of Invigilator

Time: 1 Hour 30 Minutes

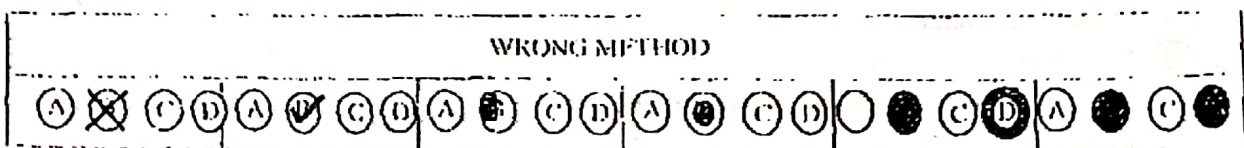
Total Marks: 80

Instructions to Candidates

1. Do not write your name or put any other mark of identification anywhere in the OMR Answer Sheet. IF ANY MARK OF IDENTIFICATIONS IS DISCOVERED ANYWHERE IN OMR ANSWER SHEET, the OMR sheet will be cancelled, and will not be evaluated.
2. This Question Booklet contains this cover page and a total of 80 Multiple Choice Questions of 1 mark. Space for rough work has been provided at the beginning and end. Available space on each page may also be used for rough work.
3. Each correct answer carries one mark.
4. There is negative marking in Multiple Choice Questions. For each wrong answer, 0.25 marks will be deducted.
5. USE OF CALCULATOR IS NOT PERMITTED.
6. USE/POSSESSION OF ELECTRONIC GADGETS LIKE MOBILE PHONE, iPhone, iPad, pager ETC. is not permitted.
7. Candidate should check the serial order of questions at the beginning of the test. If any question is found missing in the serial order, it should be immediately brought to the notice of the Invigilator. No pages should be torn out from this question booklet.
8. Answers must be marked in the OMR answer sheet which is provided separately. OMR answer sheet must be handed over to the invigilator before you leave the seat.
9. The OMR answer sheet should not be folded or wrinkled. The folded or wrinkled OMR/Answer Sheet will not be evaluated.
10. Write your Roll Number in the appropriate space (above) and on the OMR Answer Sheet. Any other details, if asked for, should be written only in the space provided.
11. There are four alternative answers to each question marked A, B, C and D. Select one of the answers you consider most appropriate and fill up the corresponding oval/circle in the OMR Answer Sheet provided to you. The correct procedure for filling up the OMR Answer Sheet is mentioned below.
12. Use Black or Blue Ball Pen only for filling the oval/circles in OMR Answer Sheet while answering the Questions. For your choice of answers darken the correct oval/circle completely. If the correct answer is 'B', the corresponding oval/circle should be completely filled and darkened as shown below.

CORRECT
METHOD

WRONG METHOD



Who launched
A. Y.P. Singh
B. Atal Bihari
C. Manmohan Singh
D. Indira Gandhi

1. The Constitution of UNO is known as:
 - A. Peace Agreement
 - B. Magna Carta
 - C. Declaration
 - D. Charter
2. Which of the following represents the concepts of human capital
 - A. Total human resources
 - B. Total population
 - C. Human resources gainfully employed in productive activities
 - X (D) All of the above
3. Jamia Millia Islamia came into existence as a bye product of
 - (A) Non-cooperation Movement
 - B. Khilafat Movement
 - C. Freedom Movement
 - D. All of the above
4. Who among the following is associated with 'White Revolution'?
 - A. P.J. Kurien
 - B. Verghese Kurien
 - C. M.S. Swaminathan
 - D. M.S. Raghunathan
5. Who among the following was the first person who delivered his speech in Hindi in UNO?
 - A. Swami Vivekananda
 - B. Lal Bahadur Shastri
 - (C) Atal Bihari Bajpayee
 - D. None of the above
6. The Convention on the Elimination of All Forms of Discrimination against Women was adopted in:
 - A. 1984
 - B. 1979
 - (C) 1992
 - D. 1989
7. The outside agency constituted to execute the proposed development projects under Smart City Project of the Government of India:
 - A. Special Purpose Vehicle
 - B. Super Task Force
 - (C) Special Task Force
 - D. Smart City Brigade
8. In 2015, the 65 year old Planning Commission of India was replaced by:
 - A. Jan Kalyan Yojna
 - (B) NITI Ayog
 - C. Planning and Development Commission of India
 - D. None of the above

9. Who launched MUDRA bank to extend credit to small business:

- A. V P Singh
- B. Atal Bihari Vajpayi
- C. Manmohan Singh
- ☒ D. Narendra Modi

10. The coveted K. Veeramani Award for Social Justice 2015 was awarded to:

- ☒ A. Nitish Kumar
- B. Mayavati
- C. M. Karunanidhi
- D. Sonia Gandhi

11. The abbreviation PMFBY stands for:

- A. Prime Minister Finance and Banking Yojna
- B. Prime Minister Farmers Banking Yojna
- ☒ C. Pradhan Mantri Fasal Bima Yojna
- D. None of the above

12. Who won the Kirti Chakra Award this year:

- A. Sepoy Jagdish Chaud
- B. Subedar Mahendra Singh
- ☒ C. Both of them
- D. None of them

13. March 15th is observed as

- ☒ A. World Consumer Rights Day
- B. World Disabled Day
- C. Both of them
- D. None of them

14. Who was the chief guest of India's 67th Republic Day functions?

- A. Francois Hollande
- ☒ B. Barak Obama
- C. Parvez Musharraf
- D. None of the above

15. Which country was declared least corrupt in the Corruption Perception Index 2015 by Transparency International?

- A. Denmark
- B. Finland
- C. Sweden
- D. New Zealand

16. As per the Prohibition of Child Marriage Act, 2006, a child means:

- A. Male below 18 years and female below 21 years
- ☒ B. Male below 21 years and female below 18 years
- C. Both male and female below 18 years
- D. None of the above

Current Affairs

17. The Supreme Court appointed Justice Lodha Committee is related to

- A. Terrorism
- B. Drinking Water
- ☒ C. Cricket
- D. Urban Shelter Issues

18. The term 'budget' has nowhere been mentioned in the Constitution of India. Instead the Constitution refers to the budget as:

- A. Yearly financial allocation
- B. Annual Monetary distribution
- ☒ C. Annual Financial Statement
- D. None of the above

19. The Panchayati Raj form of rural local government was adopted first (in the order) by:

- A. Bihar and West Bengal
- ☒ B. Rajasthan & Andhra Pradesh
- C. Kerala and Karnataka
- D. None of the above

20. The primary function of Finance Commission in India is to:

- A. Collect taxes and conduct raids
- ☒ B. Distribute revenue between the Centre and the States
- C. Borrow money from the banks and pay the interest
- D. None of the above

(Direction: (Question No. 21 and 22): Choose the correct meaning for the idioms given in italic letters)

21. You may rush from pillar to post but you have no chance in getting what you want without a bribe

- A. Be very busy
- ☒ B. Rush in all directions and suffer much harassment
- C. Go to all post boxes and post offices
- D. Go to many officers and post many letters

22. I know that she had finally burnt her boats behind her when she arrived with her suitcase and declared that she had come to stay

- A. To stranded
- ✓ B. Took an irrevocable step
- C. Set everything on fire
- x ☒ D. To have no hope of returning

(idioms). Grammar

(Direction: Read the passage and select the right answer for the questions 23 to 28)

What should be the objective of life whether money or principles. It is really difficult for a well educated, intellectual or brave person to make money the chief object of his thoughts. No doubt all the healthy people like their dinners, but their dinner is not the main object of their lives. Also, no doubt, all healthy-minded people like to make money, like to have it and enjoy the sensation of having it. But there is something better than money. For instance, doctors no doubt, like fees, yet if they are brave and well educated, the entire object of their lives is not fees. They on the whole, desire to cure the sick; and if they are good doctors and the choice were fairly put to them, would rather cure their patient and lose their fee than kill him and get it. So of a good soldier, who mainly wishes to do his fighting well. He is glad of the pay, though his main notion of life is to win battle, not to be paid for winning them. Similarly, the clergyman's object is essentially to baptize and preach, not to be paid for preaching. This is how it is also true with all the other brave and rightly trained men; their work comes first, the payment later, though very important but secondary.

23. What is the principal object of the lives of brave intellectual and well-educated people?
- A. To make money
 - B. To enjoy
 - ☒ C. To work with devotion
 - D. Manage the leisurely objects
24. According to the passage, if a doctor is brave and well educated, and a choice was put to him, what would he choose?
- ☒ A. Cure the patient and lose his fees
 - B. Kill the patient and get his fees
 - C. Any of these depending on circumstances
 - D. The passage is silent on this
25. A suitable title of the passage may be
- A. Money Making, the Chief Object of Life
 - B. Devotion to Work
 - C. Importance of Thought
 - ☒ D. Money, not the Chief Object of Life
26. One may infer from the paragraph that
- A. Brave person like to make money
 - B. Bravo persons like to win others
 - ☒ C. Brave persons like to work first than their fees
 - D. None of these
27. A person would always rank his work superior to the money if he is
- A. Brave and intellectual
 - B. Well educated
 - C. Rightly trained
 - ☒ D. All the above
28. All healthy minded people like
- A. To make money and enjoy the sensation of having it
 - B. To hold their principles supreme in comparison to money
 - C. Both A and B
 - D. Neither A nor B

(English passage)

29. ^{the} ~~A~~ wolf, meeting with ^a ~~A~~ lamb astray from ^{the} ~~A~~ fold, resolved not to lay violent hands on him, but to find some pleas to justify to ^{the} ~~A~~ lamb ^a ~~A~~ wolf's right to eat him.

- ✓ A. a, a, the, the, the
 ✗ B. the, a, the, a, the
 C. a, a, a, the, the
 D. the, the, the, the, the

(Article)

30. Which one of the following words will be at (?) given below?
 Soldier: Gun; Blacksmith: ?

- ✓ A. Hammer
 B. Sword
 C. Iron
 D. Wood

Reasoning

31. When the dog chased John, _____ ran as fast as _____ could.

- A. he, she
 ✓ B. he, he
 C. he, it
 D. it, he

Grammar

32) My best friend lives _____ Beach Road.

- A. in
 ✗ B. on
 ✓ C. at
 D. with

33) My parents have been married _____ forty-nine years.

- A. since
 ✓ B. for
 C. until
 D. in

34) You wanted that, _____?

- ✓ A. would you
 B. didn't you
 C. wouldn't you
 D. do you

35) "March fast," said the captain to the recruits.

- ✓ A. The captain commanded the recruits to march fast.
 - B. The captain said the recruits that march fast
 ✗ C. The captain ordered to the recruits march fast
 D. The captain told the recruits to march fast.

36) I said to him, "You can come to me at any time".

- ☐ A. I told him that he may come to me at any time
☒ B. I told him that he could come to me at any time.
☒ C. I said that he can come to me at any time.
☐ D. I said to him that you can come to me at any time.

Gr.
N. S. S. S.

37) John is over two hours late already. He _____ missed the bus again.

- ☐ A. should have
☒ B. must have
☐ C. will have
☐ D. would have

38) He _____ have committed this crime. He wasn't even in the city that night.

- ☒ A. might
☐ B. shouldn't
☒ C. couldn't
☐ D. dare

39) 'Let the cat out of the bag'. This means that:

- ☒ A. You told a secret
☐ B. You hurt someone's feeling
☐ C. you made a mistake
☐ D. Gave something away for free

(promotes)

40) When a friend 'crosses her fingers' for you, she

- ☐ A. hopes that things will turn out just as you hope they will
☐ B. is wishing you had luck
☐ C. hopes that you will go away
☒ D. is not telling the truth

41) Which state is called the 'Tiger State' of India?

- ☐ A. Maharashtra
☒ B. Gujarat
☐ C. Madhya Pradesh
☐ D. Tamil Nadu

42) Cerebral Palsy is a brain disorder found generally in:

- ☐ A. Small children
☒ B. adolescents
☐ C. Young adult
☐ D. Elderly people

43) Bishop, Rook, Castle, Pawn, ELO ratings are terms associated with the game:

- ☐ A. Hockey
☒ B. Chess
☐ C. Cricket
☐ D. Foot ball

SET B

2016

44. Founder of the Aligarh Movement:

- A. Moulana Muhammad Ali Jauhar
- B. Dr. Zakir Hussain
- ☒ C. Sir Syed Ahmad Khan
- D. None of the above

45. In Piaget's view which of the following stage of development is the highest stage in terms of cognitive development?

- ☒ A. Childhood
- B. Adolescence
- C. Adulthood
- D. Old age

46. In which conditioning paradigm of learning reinforcement follows rather than precedes a response?

- A. Classical conditioning
- B. Operant conditioning
- C. Contiguous conditioning
- D. Backward conditioning

47. In a hypothesis, the relationship being affirmed is:

- A. Tentative
- B. Final
- C. Unfounded
- D. Ill-founded

48. Which of the following will not form part of qualitative research?

- A. Case study
- B. Participant observation
- ☒ C. Survey study
- D. Naturalistic enquiry

Consideration

49. The guardianship of Indian Constitution is vested in:

- A. President
- B. Lok Sabha
- ☒ C. Supreme Court
- D. Cabinet

50. Which one of the following articles of the Constitution of India is related to equality before law?

- A. Article 16
- B. Article 15
- ☒ C. Article 14
- D. Article 13

51. Which part of the Indian Constitution has been described as the soul of the Constitution?

- A. Fundamental Rights
- X ☒ B. Directive Principles of State Policy
- C. The Preamble
- D. Right to Constitutional Remedies

52. Which section of the Indian Penal Code talks about the sedition charges:

- A. 114
- B. 121
- C. 124-A
- D. 133

53. In Panchayati Raj system the Gram Panchayat is constituted at the:

- A. Village level
- B. Block level
- C. District level
- D. State level

54. The term 'Evergreen Revolution' has been used for increasing agricultural production in India by:

- A. Norman Harlogue
- B. M.S. Swaminathan
- C. Raj Krishna
- D. R.K.V. Rao

55. Indian Journal of Social Work is published from:

- A. Tata Institute of Social Sciences
- B. Delhi School of Social Work
- C. Jamia Millia Islamia
- D. Madras School of Social Work

56. The abbreviation NAPSWI stands for:

- A. National Association of Psychiatric Social Workers in India
- B. National Alliance for Promotion of Social Work in India
- C. National Association of Professional Social Workers in India
- D. None of the above

57. Communication needs a:

- A. Sender
- B. Receiver
- C. Channel
- D. All of these

The Fundamental Duties of a citizen as per the Constitution of India includes:

- 1. To Respect for the Constitution, the National Flag and the National Anthem
- 2. To develop the scientific temper
- 3. Respect for the Government
- 4. To protect wildlife -

Choose the correct answer from the codes given below:

- A. 1, 2 and 3
- B. 1, 2, and 4
- C. 2, 3, and 4
- D. 1, 2, 3 and 4

The Constitution

59. Which one of the following is not the tool of good governance?

- A. Right to information
- B. Citizens' Charter
- C. Social Auditing
- D. Judicial Activism

60. The Indian Constitution has given a special status to the State of Jammu and Kashmir under Article:

- A. 352
- B. 370
- C. 368
- D. 361

61. Shailish types 80 words per minutes and takes 48 minutes to type a certain document. His friend Pappu has a typing speed of 96 words per minutes. In how much time will he be able to type the same document?

- A. 40 minutes
- B. 20 minutes
- C. 10 minutes
- D. 30 minutes

62. Pointing out to a lady, a girl said: "She is the daughter-in-law of the grandmother of my father's only son." How is the lady related to the girl?

- A. Mother
- B. Aunt
- C. Cousin
- D. Grandmother

63. The missing term (?) in the series 5, 11, 17, 23, ?, 41 is:

- A. 29
- B. 31
- C. 33
- D. 37

64. Three years back the average age of a family of 6 members was 19 years. A baby having being born, the average of the family remains the same. Then the age of the baby (in years) is:

- A. 1
- B. $1\frac{1}{2}$
- C. 2
- D. 3

65. A thief is spotted by a watchman from a distance of 200 m. When the watchman starts the chase, the thief also starts running. If the speed of the thief be 10 km/hr and that of watchman 12 km/hr, how far the thief will have run before he is overtaken?

- A. 1 km
- B. 2 km
- C. 3 km
- D. 4 km

RM1312

SET B

2016

66. Sanjeev remembers that his father's birthday falls after 9th May and before 12th May, while his sister Ashu remembers that her father's birthday falls after 10th May and before 13th May. What is the date of birthday of their father?

- A. 9th May
B. 10th May
C. 11th May
D. 12th May

10, 11

11, 12

67. A clock is set right at 8 am. The clock gains 10 minutes in 24 hours. What will be the right time when the clock indicates 1 pm on the following day?

- A. 46 min. past 12
B. 47 min. past 12
C. 48 min. past 12
D. 49 min. past 12



$$\frac{24}{10} = \frac{10}{x}$$

68. Prateesh started a business with Rs. 21000 and is joined afterwards by Ranjan with Rs. 36000. After how many months did Ranjan join, if the profits at the end of the year are divided equally?

- A. 5 months
B. 6 months
C. 7 months
D. 8 months

Remaining 11 months

69. Identify the missing letters from the letter series: A, Z, D, X, G, V, J, T, M, ...

- A. S, N
B. P, R
C. N, S
D. R, P

70. Identify the wrong number in the series: 5, 11, 23, 47, 96, 191, 383

- A. 96
B. 5
C. 11
D. 191

$$96 \times 2 = 192$$


$$\frac{191}{2} = 95.5$$

12, 26

A 2



71. Facing towards South, Manjeet walked 50 meters. He then turned to his right and walked 30 meters. He again turned right and walked 50 meters. How far was he from his original point and in which direction he is now?

- A. 30 meters and in the West
B. 50 meters and in the East
C. 50 meters and in the West
D. 20 meters and in the West




72. A school boy was misdirected from his way while returning to his home. In order to reach his home he first moved 3 Km in south direction and then turned to his left. 2 Km from there he moved to his left and walked 3 Km. After this he again turned to his left and moved 1 Km. Finally, he reached his home. The home of the boy was in which direction from his school?

- A. West
B. North
C. East
D. South



73. Six families A, B, C, D, E and F are living in houses in a row. B has D and F as neighbors, E has A and C as neighbors. A does not live next to either of F or D. If C does not live next to D, who are F's next door neighbors?

- A. Only B
- B. Only B and D
- C. Only B and F
- D. Only B and C



74. A, B and C together can finish a piece of work in 4 days. A alone can do it in 12 days and B alone in 18 days. How many days will be taken by C to do it alone?

- A. 21
- B. 16
- C. 14
- D. 9

Handwritten solution for Q74:

$$A+B+C = \frac{1}{4} \text{ work/day}$$

$$A = \frac{1}{12}$$

$$B = \frac{1}{18}$$

$$\frac{1}{4} - \left(\frac{1}{12} + \frac{1}{18} \right) = \frac{1}{36}$$

75. The statement 'to be non-violent is good' is a:

- A. Moral judgment
- B. Factual judgment
- C. Religious judgment
- D. Value judgment

Handwritten calculations for Q75:

$$\frac{1}{4} - \left(\frac{1}{12} + \frac{1}{18} \right) = \frac{1}{36}$$

$$\frac{1}{36} \times 36 = 1$$

(Directions Q. No. 76-80: in each of the following questions, two statements are given. Based on these statements an inference has been drawn.)

76. Statements:

- i. Happy is the one who are contended
- ii. Religious people are contended

Inference: Religious people are happy

- A. The inference is definitely true
- B. The inference is definitely false
- C. The inference is probably true or probably false
- D. The inference cannot be drawn

Handwritten calculations for Q76:

$$\frac{1}{4} - \left(\frac{1}{12} + \frac{1}{18} \right) = \frac{1}{36}$$

$$\frac{1}{36} \times 36 = 1$$

77. Statements:

- i. All successful students believe in labour
- ii. Labour cannot go in vain in workful life

Inference: After death, we remember the quality of labour

- A. The inference is definitely true
- B. The inference is definitely false
- C. The inference is probably true or probably false
- D. The inference cannot be drawn

78. The ratio of Meena's age and Kamla's age is 3:5 and the sum of their ages is 80 years. The ratio of their ages after 10 years will be:

- A. 2:3
- B. 1:2
- C. 3:2
- D. 3:5

Handwritten solution for Q78:

$$\frac{3}{5} = \frac{x}{80-x}$$

$$3(80-x) = 5x$$

$$240 - 3x = 5x$$

$$240 = 8x$$

$$x = 30$$

$$\text{Ratio after 10 years} = \frac{30+10}{50+10} = \frac{40}{60} = \frac{2}{3}$$

ENTRANCE EXAMINATION-2017

M.A (SOCIAL WORK)

SET B

ROLL NO.

M	1	3	1	1	3	8	6
---	---	---	---	---	---	---	---



Signature of Invigilator

Time: 1 Hour 30 Minutes

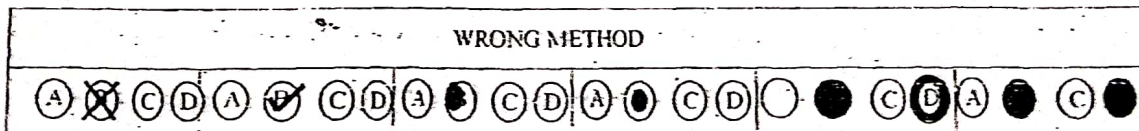
Total Marks: 80

Instructions to Candidates

1. Do not write your name or put any other mark of identification anywhere in the OMR Answer Sheet. IF ANY MARK OF IDENTIFICATIONS IS DISCOVERED ANYWHERE IN OMR ANSWER SHEET, the OMR sheet will be cancelled and will not be evaluated.
2. This Question Booklet contains this cover page and a total of 80 Multiple Choice Questions of 1 mark. Space for rough work has been provided at the beginning and end. Available space on each page may also be used for rough work.
3. Each correct answer carries one mark.
4. There is negative marking in Multiple Choice Questions. For each wrong answer, 0.25 marks will be deducted.
5. USE OF CALCULATOR IS NOT PERMITTED.
6. USE/POSSESSION OF ELECTRONIC GADGETS LIKE MOBILE PHONE, iPhone, iPad, pager ETC, is not permitted.
7. Candidate should check the serial order of questions at the beginning of the test. If any question is found missing in the serial order, it should be immediately brought to the notice of the Invigilator. No pages should be torn out from this question booklet.
8. Answers must be marked in the OMR answer sheet which is provided separately. OMR answer sheet must be handed over to the invigilator before you leave the seat.
9. The OMR answer sheet should not be folded or wrinkled. The folded or wrinkled OMR Answer Sheet will not be evaluated.
10. Write your Roll Number in the appropriate space (above) and on the OMR Answer Sheet. Any other details, if asked for, should be written only in the space provided.
11. There are four alternative answers to each question marked A, B, C and D. Select one of the answers you consider most appropriate and fill up the corresponding oval/circle in the OMR Answer Sheet provided to you. The correct procedure for filling up the OMR Answer Sheet is mentioned below.
12. Use Black or Blue Ball Pen only for filling the oval/circles in OMR Answer Sheet while answering the Questions. For your Choice of answers darken the correct oval/circle completely. If the correct answer is 'B', the corresponding oval/circle should be completely filled and darkened as shown below.

CORRECT
METHOD

WRONG METHOD



1. What is India's rank in top 10 nation of the world having highest PPP based GDP in 2015?
 - A. Second
 - B. Third
 - C. Fourth
 - D. Fifth
2. Who among the following conceived the society as 'a cooperative venture for mutual advantage'?
 - A. Rawls
 - B. Nozick
 - C. Hayek
 - D. Gramsci
3. Who among the following said: "Research untutored by theory may prove trivial, and theory unsupported by data, futile"?

The eight characteristics features of behaviourism as given by David Easton are as follows: (1) Regularity (2) Verification (3) Techniques (4) Quantification (5) Values (6) Systematization (7) Prediction

 - A. B. Crick
 - B. Charles Merriam
 - C. David Easton
 - D. R.A. Dahl
4. Which of the following constitutes the political elite?
 - A. Subalterns and marginalized leaders
 - B. Rulers and subjects
 - C. Leader and the followers
 - D. Oligarchy and aristocracy
5. Arrange the following revolutions in the sequence in which they took place: 1. Chinese Revolution; 2. Cuban Revolution; 3. Bolshevik Revolution; 4. Puritan Revolution
 - A. 1,2,4,3 1953 1917 1640-1648
 - B. 2,1,3,4
 - C. 4,3,1,2
 - D. 3,4,2,1
6. A training technique in which trainees are first shown good management techniques in a film, are asked to play roles in a simulated situation, and are then given feedback and praise by their supervisor, is known as-
 - A. Behaviour modeling
 - B. Role playing
 - C. In-house development center
 - D. Management game
7. Who gave the surplus value theory of wage?
 - A. David Ricardo
 - B. Karl Marx
 - C. Adam Smith
 - D. F.A. Walker

8. Which of the following scheme of Govt. of India has created Guinness World Record for largest cash transfer programme?

- A. Aam Admi Bima Yojana
- B. MGNREGA
- C. Pahal
- D. Jan Dhan Yojana

9. Who is the present Human Resource Development Minister in the Union Cabinet in India?

- A. Smriti Irani
- B. Venkaiah Naidu
- C. Anupriya Patel
- D. Prakash Javadekar

10. International Day of Yoga is celebrated on which day?

- A. 8th March
- B. 26th January
- C. 28th February
- D. 21st June

11. The effectiveness of oral communication depends on the speaker's ability to use

- A. Simple language
- B. Long sentences
- C. Foreign words
- D. Complex words

12. The foremost barrier to oral communication is

- A. Poor listening
- B. Humility
- C. Interestedness
- D. Concentration

13. The 'Vanbandhu Kalyan Yojana' (VKY) is aimed at improving the infrastructure and human development indices of the

- A. Farmers and agriculturists
- B. Tribal population
- C. Senior citizens
- D. Women entrepreneurs

14. The First Education Minister of independent India was:

- A. Radhakrishnan
- B. Maulana Azad
- C. C.D. Deshmukh
- D. Kothari

15. River Kishanganga is in
 - A. Uttar Pradesh
 - B. Telangana
 - C. Jammu & Kashmir
 - D. Himachal Pradesh
16. is vector that causes malaria.
 - A. Anopheles
 - B. Culex
 - C. Aedes
 - D. None of the above
17. As per the Juvenile Justice (Care and Protection of Children) Act, 2015, a 'Child' is defined as:
 - A. A person who has not completed six years of age
 - B. A person who has not completed sixteen years of age
 - C. A person who has not completed eight years of age
 - D. A person who has not completed eighteen years of age
18. The Air (Prevention and Control of Pollution Act) was passed in the year:
 - A. 1941
 - B. 1961
 - C. 1981
 - D. 2001
19. The National Green Tribunal was constituted as per:
 - A. The Unlawful Activities (Prevention) Act, 1967
 - B. The Water (Prevention and control of Pollution) Act, 1974
 - C. The Environment (Protection) Act, 1986
 - D. None of the above
20. As per the Probation of Offenders Act, 1956. Probation means:
 - A. Conditional suspension of sentence
 - B. Unconditional let off
 - C. Conditional release of prisoners
 - D. None of the above
21. The Modi government set up NITI Aayog in place of the Planning Commission. NITI stands for:
 - A. National Initiative for Transferring India
 - B. National Institution for Transforming India
 - C. National Integrity Transforming Initiative
 - D. New Initiative for Transforming India
22. Change the sentence into passive voice: 'All his friends helped him'
 - A. He helped all his friends
 - B. He helps all his friends
 - C. He was helped by all his friends
 - D. He is helped by all his friends

23. Which among the following does NOT constitute part of the Fundamental Duties, in the Part IV-A of the Constitution of India:

- A. To defend the country and render national service when called upon to do so
- B. To promote harmony and the spirit of common brotherhood amongst all the people of India
- C. To prevent crime and promote human rights
- D. To renounce practices derogatory to the dignity of women

24. Which particular Article in the Constitution of India speaks about abolition of untouchability:

- A. 16
- B. 17
- C. 18
- D. 19

25. Fill in the blank in the given sentence by choosing the correct option: 'Please do not forget to submit your application time.'

- A. by
- B. of
- C. in
- D. with

26. Change the given sentence into indirect speech: 'Radha said, "I am well"'

- A. Radha said that I am well
- B. Radha said that she is well
- C. Radha said that she was well
- D. Radha said that she should be well

27. Transform the following sentence: 'You are as big a fool as a donkey'

- A. A donkey is not as foolish as you
- B. A donkey is not as big a fool as you
- C. A donkey is not more foolish as you
- D. A donkey cannot be a lesser fool than you

28. Identify the part of speech of the underlined word: 'It will be ten years before we meet again.'

- A. Preposition
- B. Adverb
- C. Conjunction
- D. Adjective

29. Three of the following are alike in a certain way and form a group. Find the odd one out?

- A. Bird
- B. Insect
- C. Airplane
- D. Kite

30. Find the odd one out?

- A. Tomato
- B. Onion
- C. Lady finger
- D. Chilly

Directions: (Q. No. 31 to 36) you have a brief passage with 6 questions following passage. Read the passage carefully and choose the best answer to each of the questions of the four alternatives given.

'Man is surrounded by culture right from the time of his birth. Culture makes many demands on man through the mechanization of approval and disapproval. Culture influences personality through the process of socialization and social control. Broadly speaking education is the transmission of cultural heritage. It is also the means of social control. In the middle ages cultural education was meant for only certain classes, but today it is open for all. Today culture means acquainting oneself with the best that has been thought and said in the world. The main objective of cultural education is to guard against narrow specialization what is known as liberal education. Certain aspects of culture stand the test of time and merit preservation and promotion; certain other aspects need revision, if not total abolition. Regional imbalances, income inequalities, racial feelings, narrow concepts as they stand today are certainly a stigma on the Indian culture. Hence their abolition is necessary precondition for the promotion of a healthy social order.

31. According to the writer, through what means the culture demands on man?

- A. Man is surrounded by culture
- B. The process of socialization and social control
- ☒ C. Mechanization of approval and disapproval
- D. Through the transmission of education

32. Which one of the following statement is NOT true?

- ☒ A. Culture is not a means of socialization
- ☒ B. Promotion of racial feelings is the precondition of healthy social order
- ☒ C. Today education is open to all
- D. Middle ages education was not open to all

33. The statement "Today culture means acquainting oneself the best" means-

- A. Influences personality
- ☒ B. Helps for liberal education
- C. Means of social control
- D. Enhances narrow specialization

34. Which one of the following is opposite in meaning to the word 'Merit' coming in the passage?

- A. Prosperity
- B. Progress
- C. Misfortune
- ☒ D. Discourage

35. Which one of the following aspects stands the test of time?

- A. Cultural heritage
- B. Socialization and social control
- C. Regional imbalances and income inequalities
- D. Liberal education

36. What is the solution for promoting good cultural society?

- A. Abolition of stigmatic factors
- B. Provision of good education
- C. Process of socialization and social control
- D. Transmission of cultural heritage

Directions: (Q. No. 37 to 43) You have a brief passage with 7 questions following passage. Read the passage carefully and choose the best answer to each of the questions of the four alternatives given.

Democracy, so long as it is what it is, ^{अतिशय दुर्लभ} imperfectly educated, throws a great responsibility on the leaders. The average voter even in educated England has no opinion of his own on many questions. He chooses his party by tradition or by his agreement with its central aims in those matters on which he has strong views. On other questions he takes his opinions from the leaders. His conscience is clear when the party is chosen and for the rest the leaders decide and the voters obey. In a complex social machine, it is difficult for the units to exercise thought. It is easier to be obedient automata. It does not even pay to think. Perhaps thought may prove costly. If the leaders want to create public opinion, the machinery of the press and the wireless makes it most easy. Modern conditions afford propagandists vastly increased opportunities of promoting collective excitement and setting the world in a conflagration. A few clever and adventurous leaders can excite people's passions and suppress intellectual freedom. In these circumstances, truth does not win as there is no attempt to find out truth.

37. The most suitable title for the given passage would be:

- A. Democracy and public opinion
- B. Democracy and intellectual freedom
- C. The role of leaders in a democracy
- D. The role of voters in a democracy

38. The opening sentence of the passage implies that:

- A. The responsibility of educating a democracy lies with its leaders
- B. Leaders in democracy with imperfectly educated voters have to shoulder great responsibility
- C. A well educated democracy is based on responsible leadership
- D. In democracy with uneducated masses; the leaders are highly duty conscious

39. From the third sentence "He chooses his party by tradition....." we gather that

- A. An English voter selects a party which strongly stands for traditional and popular beliefs
- B. The average voter in England votes for a party because of tradition irrespective of his agreement or disagreement with its basic policies
- C. In England an average voter supports a party either as a practice or because of his agreement with its broad policies
- D. In a democracy one votes for a party with whose objectives and policies he agrees on all matters.

40. "In a complex social machine....." the statement implies that:
- It is difficult for an individual to challenge a complicated social machinery
 - In a society which works like a machine, an individual cannot be permitted to have his own political ambitions
 - In a mechanical age a person cannot have individual aspirations
 - An individual finds it hard to formulate his own opinion in a complicated social structure.

41. The statement "it does not even pay to think" means that:

- Thinking is actually discouraged
- Thoughtful persons are condemned
- Thinking brings no advantage
- Thinking is not allowed

42. According to the author, it is most convenient for a leader to "create public opinion" because:

- He has been chosen by the public whom he represents
- The modern means of mass communication are readily available to him
- Even an educated voter takes his opinion from the leader
- The average voter has no opinion of his own

43. The word 'conflagration' in the passage signifies:

- Confusion
- Widespread fire
- Conflict
- Unforeseen calamity

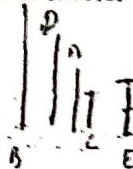
44. If code of DELHI is HIPLM, then QEHVEW is the code of:

- MUMBAI
- MADRAS
- NAGPUR
- JAIPUR

DELHI → HIPLM
QEHVEW → ?


45. A is shorter than D but taller than C. D is shorter than B but taller than A. E is shorter than A but taller than C. the two tallest are:

- E and A
- E and B
- B and D
- C and B



46. Krishna walks 1 km East of his house then 1 km North, again 2 km East, 3 km South and 3 km West. To reach his house he must walk-

- 1 km North
- 1 km South
- 2 km South
- 2 km North



47. Four children are sitting in a row. A is occupying the seat next to B but not next to C. If C is not sitting next to D, who is occupying seat adjacent to D?

- A. B
- B. A
- C. C
- D. Impossible to tell

$$1 \ 1 \ 1 \ 1 = \frac{12}{2} (11 + 12 \times 5)$$

$$\frac{12 \times 56}{2} = 168$$

48. Find the number when added to itself 13 times yields 112.

- A. 8
- B. 9
- C. 10
- D. 11

$$13 = \frac{14(n-1)d}{40 \times 127}$$

$$a + (n-1)d$$

$$S_n = \frac{n}{2} (2a + (n-1)d)$$

$$\frac{112 \times 12}{13} = \frac{129}{2} = 9$$

49. Shyam buys pineapples and coconuts. A pineapple costs Rs. 70 and a coconut costs Rs. 50. If Shyam spends a total amount of Rs. 380, how many pineapples does he purchase?

- A. 2
- B. 3
- C. 4
- D. Data is insufficient

$$70 - \text{Pine} \quad 50 - \text{Coconut}$$

$$\begin{array}{r} 380 \\ 70 \times 5 = 350 \\ \hline 30 \end{array}$$

50. Aslaim ranked 9th from the top and 38th from the bottom in a class. How many students are there in the class?

- A. 45
- B. 46
- C. 47
- D. 48

$$9 + 38 - 1 = 46$$

51. The present age of P is three times that of his son A. Five years ago the age of Q was one fourth of the age of P. What will be the number obtained by adding the age of P and Q five years from now?

- A. 50
- B. 70
- C. 69
- D. 60

$$\text{Present age of P} = 3x \quad \text{his son age} = x$$

$$Q = \frac{1}{4}(3x-5) + 5 \quad (3x+5) + (3x-5) + 10$$

$$= \frac{12x + 20 + 3x - 5}{4} + 40$$

52. Fill the blank with appropriate letter ZWU: ADE: XUS:.....

- A. CFH
- B. CHF
- C. DFG
- D. DEG

$$A B C D$$

$$W, X, Y, Z$$

$$A B / D E F G H$$

$$S T U V W X Y Z$$

$$= \frac{15x + 55}{4} = 50 \frac{1}{4}$$

53. Four years ago, the respective ratio between the age of Ram and that of Sonu was 4:9. Tina is ten years older to Ram. Tina is ten years younger to Sonu. What is Tina's present age?

- A. 40 years
- B. 36 years
- C. 30 years
- D. 20 years

$$R : S = 4 : 9$$

$$20 = 4 \quad 16, 36$$

$$10 \quad 16, 36$$


$$20 \quad 36 \quad 40 \quad 50$$

BM132

ENTRANCE EXAMINATION-2017

SET B

- A. 12.30 pm
B. 1.50 pm
✓ C. 1.00 pm
D. 12.50 pm



Directions – (Q.No. 55-60) Study the table and answer the given questions:
Data regarding number of students who appeared in the examination

Data regarding number of books sold in either hard bounds or paperback editions and also the categories of books sold in fiction and non-fiction category by four different shops, in a particular month (February 2017)

Book-Shops	Respective ratio between number of hard bounds sold and number of paperbacks sold	Number of paperbacks sold out of total	% of fictions (hard-bound + paperback) sold out of total books sold
A	2:3	1200	60
B	1:5	1000	65
C	1:3	600	70
D	3:5	675	75

Note- (i) total books sold = number of hard bound + number of paperbacks sold

55. Number of hard bound editions sold by shop C is what percent less than that sold by shop A?

- A. 90
✓ B. 50
C. 75
D. 70

$23 \quad 604 \quad \begin{array}{r} 40 \\ \hline 15 \end{array}$

$15 \quad 604 \quad 4 \quad 15$

$2:15 \quad \boxed{2:3:15}$

56. Number of non-fictions sold by shop B is what percent of number of non-fictions sold by shop A?

- A. 52.5
B. 64.75
C. 50
D. 40

57. Total number of books sold by shop B is what percent more than that sold by shop D?

- A. $15\frac{1}{2}$
B. 25
C. 30
D. $11\frac{1}{9}$

58. What is the average number of fictions sold by shops A and B?

- A. 900
B. 720
C. 880
D. 990

59. In March 2017, the number of paperback editions sold by shop D was 20% more than the same sold by the same shop in the previous month. The number of paperback editions sold in March 2017 by shop D constituted 50% of the total number of books sold by shop D in March 2017. What was the total number of books sold in March 2017 by shop D?

- A. 1860
- B. 1240
- C. 1760
- D. 1620

60. What is the respective ratio between the number of non-fictions sold by shop C and number of non-fictions sold by shop D?

- A. 7:9
- B. 8:9
- C. 6:7
- D. 8:11

61. Human resources gainfully employed in productive activities is called

- A. Human Force
- B. Human Resource
- C. Human Capital
- D. None of the above

62. As a bye product of the Non-cooperation Movement and Freedom Movement, Jamia Millia Islamia came into existence in the year:

- A. 1920
- B. 1930
- C. 1940
- D. 1947

63. Verghese Kurien is popularly known as the father of:

- A. Green Revolution
- B. Blue Revolution
- C. White Revolution
- D. Pink Revolution

64. International Women's Day is observed every year on:

- A. 8th March
- B. 15th March
- C. 1st December
- D. 15th December

65. 10th December is observed as International Human Rights Day, to commemorate the adoption of:
- UN Declaration of Human Rights
 - International Declaration of Civil and Political Rights
 - International Declaration on Economic, Social and Cultural Rights
 - All of the above
66. The World Consumer Rights Day being observed on 15th March is historically associated with the name:
- Franklin D. Roosevelt
 - Harry S. Truman
 - John F Kennedy
 - Barak Obama
67. The chief guest of the India's Republic Day Celebrations in the year 2017 was:
- Aung San Suu Kyi
 - Mohammed bin Zayed Al Nahyan
 - Francois Hollande
 - None of the above
68. Indian Journal of Social Work is published from:
- Jamia Millia Islamia
 - Delhi School of Social Work
 - Madras School of Social Work
 - Tata Institute of Social Sciences.
69. According to IASSW and IFSW, 2001 the social work profession promotes:
- Social change
 - Social reform
 - Revolution
 - Social Modification
- ✓ 70. Social case work is concerned with:
- Adjustment and development of individuals
 - Change and reform in the society
 - Social action
 - Task oriented approach
71. The book "Working with Communities, (1997)" in Indian context is authored by:
- M.G. Ross
 - Michael Rothman
 - ✓ H.Y. Siddiqui
 - D.K. Gangrade

72. The abbreviation POSDCORB stands for
- Planning, Organizing, Staffing, Directing, Coordinating, Reporting, Balancing
 - Planning, Operating, Staffing, Directing, Coordinating, Reporting, Budgeting
 - Planning, Organizing, Staffing, Directing, Coordinating, Reporting, Budgeting
 - Planning, Operating, Staffing, Directing, Cooperating, Reporting, Budgeting
73. ICSSR stands for:
- International Convention on Scientific Sector Reforms
 - Indian Council of Social Sciences Research
 - Indonesian Committee on Service Sector Reforms
 - None of the above
74. AMRUT is the short form for:
- Asian Meeting for Road and Urban Transport
 - Atlantic Mission for Recruitment and Upliftment Training
 - Atal Mission for Rejuvenation and Urban Transformation
 - None of the above
75. Mother Teresa Memorial International Award for Social Justice -2016 by Harmony Foundation was awarded to:
- Justice Rejinder Sachar
 - Faraaz Ayaaz Hossain
 - Justice Markandeya Katju
 - None of the above
76. Out of 183 countries, India's rank in the Global Youth Development Index-2016 compiled by the Commonwealth Secretariat on the countries' prospects for young people in employment, education, health, civic and political spheres is:
- 31
 - 77
 - 133
 - 183
77. The Social Worker popularly known for his/her leadership role in Narmada Bachao Andolan:
- Arvind Kejriwal
 - Anna Hazare
 - Medha Patkar
 - Kiran Bedi
78. The book 'Wings of Fire' was authored by:
- Dr. Manmohan Singh
 - Dr. A P J Abdul Kalam
 - Dr. C Radhakrishnan
 - None of the above

79. All vital atmospheric processes leading to various climatic and weather conditions take place in the

- A. Troposphere
- B. Stratosphere
- C. Mesosphere
- D. None of the above

80. At what rank has India been placed in Global Hunger Index 2016?

- A. 90th
- B. 95th
- C. 97th
- D. 99th