

Paper Code No. **B22**Question Booklet No. **220101**

ENTRANCE EXAMINATION – 2019


(HINDI/ENGLISH MEDIUM)

ROLL NO.

B 2216551

रोल नं.

B 2216551



Signature of Invigilator

Time : 3 HOURS

Total Marks : 170

Instructions to Candidates



1. Do not write your name or put any other mark of identification anywhere in the OMR Response Sheet. IF ANY MARK OF IDENTIFICATIONS IS DISCOVERED ANYWHERE IN OMR RESPONSE SHEET, the OMR sheet will be cancelled, and will not be evaluated.
2. This Question Booklet contains the cover page and a total of 170 Multiple Choice Questions of 1 mark each
3. Space for rough work has been provided at the beginning and end. Available space on each page may also be used for rough work.
4. There is negative marking in Multiple Choice Questions. For each wrong answer, 0.25 marks will be deducted.
5. USE/POSSESSION OF ELECTRONIC GADGETS LIKE MOBILE PHONE, iPhone, iPad, page ETC. is strictly PROHIBITED.
6. Candidate should check the serial order of questions at the beginning of the test. If any question is found missing in the serial order, it should be immediately brought to the notice of the Invigilator. No pages should be torn out from this question booklet.
7. Answers must be marked in the OMR response sheet which is provided separately. OMR Response sheet must be handed over to the invigilator before you leave the seat.
8. The OMR response sheet should not be folded or wrinkled. The folded or wrinkled OMR/Response Sheet will not be evaluated.
9. Write your Roll Number in the appropriate space (above) and on the OMR Response Sheet. Any other details, if asked for, should be written only in the space provided.
10. There are four options to each question marked A, B, C and D. Select one of the most appropriate options and fill up the corresponding oval/circle in the OMR Response Sheet provided to you. The correct procedure for filling up the OMR Response Sheet is mentioned below.
11. Use Black or Blue Ball Pen only for filling the ovals/circles in OMR Response Sheet. Darken the selected oval/circle completely. If the correct answer is 'B', the corresponding oval/circle should be completely filled and darkened as shown below.

CORRECT METHOD

(A) (B) (C) (D)

WRONG METHOD

(A) (B) (C) (D) (A) (B) (C) (D) (A) (B) (C) (D) (A) (B) (C) (D) (A) (B) (C) (D) (A) (B) (C) (D)

General Ability

1. In which of the following cities The Water Metro, an integrated water-transport project has started?

- (A) Thiruvananthapuram
- (B) Kozhikode
- (C) Kollam
- (D) Kochi City

2. Which of the following document is unveiled by Niti Aayog having future goals for Indian Economy?

- (A) Strategy for Modern India
- (B) New India Mission
- (C) Shreshth Bharat Strategy
- (D) Strategy for New India @75

3. Which of the following state has launched the People's 'Empowerment- Enabling Transparency and Accountability' Scheme?

- (A) Andhra Pradesh
- (B) Karnataka
- (C) Odisha
- (D) West Bengal

4. Recently third meeting on National council on India's nutritional challenge was held on Children's Day, what is the full form of e-ILA, an initiative related to Poshan Abhiyan?

- (A) Incremental learning advantage
- (B) Induced learning approach
- (C) Increased learning aspiration
- (D) Incremental learning approach

5. Which of the following ministries organizes Hunar Haat in every district, starting from New Delhi?

- 1. Ministry of Minority Affairs
 - 2. Ministry of Culture
 - 3. Ministry of Micro, Small, Medium Enterprises
- Choose the correct options of the following:

- (A) 1 only
- (B) 2 only
- (C) 1 and 3 only
- (D) All of the above

6. Consider the following statements regarding G20 Summit:

- 1. G20 is made up of 19 countries and the European Union.
- 2. G20 shares about 2/3rd of the world's population and 3/4th of international

trade.

3. Argentina is hosting this year's summit and India will host in 2022.

Choose the correct options of the following:

- (A) 1 and 2 only ✓
- (B) 2 and 3 only
- (C) 1 and 3 only
- (D) All of the above

7. World's standard definition of Kilogram, Second & Metre was redefined recently on which of the following physical constants?

- (A) Gravitational Constant
- (B) Planck's Constant ✓
- (C) Richardson constant
- (D) Stefan-Boltzmann constant

8. India among nations that face grave danger to soil biodiversity according to the study published by-

- (A) Geological Survey of India ✓
- (B) WWF
- (C) ISFR- 2017
- (D) Forest Survey of India

9. ISRO's satellite GSAT-7A was recently launched from which space station?

- (A) Satish Dhawan Space Centre, Sriharikota, Andhra Pradesh ✓
- (B) Vikram Sarabhai Space Centre, Thiruvananthapuram (Thumba), Kerala
- (C) Abdul Kalam Island, Balasore, Odisha
- (D) Baikonur Cosmodrome, Kazakhstan

10. Recently what new name has been given to the Indian Premier League (IPL) franchise Delhi Daredevils?

- (A) Delhi Tigers
- (B) Delhi Rangers
- (C) Delhi Lions
- (D) Delhi Capitals ✓

11. Legendary Indian Classical Musician Ustad Imrat Khan belongs to which of the following Gharana of India?

- (A) Imdadkhani Gharana
- (B) Senia Gharana
- (C) Jaipur Gharana
- (D) Bishanpur Gharana

12. Universal Children's Day is observed on-

- (A) 14 November
- (B) 20 November ✓

- (C) 12 December
- (D) 24 November

13. The theme of the 2018 World Habitat Day was-

- (A) Municipal Solid Waste Management
- (B) Housing Policies: Affordable Homes
- (C) Housing at the Centre
- (D) Public Spaces for All

14. What is the name of the book launched by Prime Minister on the life of famous cartoonist RK Laxman?

- (A) Vibrant Laxman
- (B) Political Cartoon of Laxman
- (C) Timeless Laxman
- (D) Politics of Cartoon: RK Laxman's narrative

15. Who is the founder of Google?

- (A) Jan Koum and Brian Acton
- (B) Larry Page and Jan Koum.
- (C) Larry Page and Brian Acton
- (D) Larry Page and Sergey Brin

16. Which one of the following is not included in the revenue account of union budget?

- (A) Profits and dividends of government departments and public undertakings
- (B) Interest receipts
- (C) Small savings
- (D) Tax receipts

17. In which of the following projects for the first time, sprinkler irrigation system has been made compulsory in Rajasthan?

- (A) Narmada canal project
- (B) Parwan Project
- (C) Takli Project
- (D) Dholpur Lift Project

18. The machine language of computer is based on-

- (A) Boolean algebra
- (B) Abstract algebra
- (C) Linear algebra
- (D) Matrix algebra

19. The total amount of green-house gases produced, to directly and indirectly support human activities, is referred to as-

- (A) Carbon sequestration
- (B) Carbon dioxide index
- (C) Carbon capture
- (D) Carbon footprint ✓

20. In human trisomy of chromosome number 21 is responsible for-

- (A) Down syndrome
- (B) Haemophilia
- (C) Turner syndrome
- (D) Klinefelter syndrome

21. Which of the following committees was set up in the India for identification of BPL families in Urban areas?

- (A) Tendulkar committee
- (B) Saxena committee
- (C) Lakdawala committee
- (D) Hashim committee

22. Who among the following Governor-Generals ridiculed congress as representing only a 'microscopic minority' of people?

- (A) Lord Dufferin ✓
- (B) Lord curzon
- (C) Lord minto
- (D) Lord lansdown

23. Arrange the following events in their chronological order and select the correct answer from the codes given below:

- I. Muhammad shah
- II. Jahandar shah
- III. Alamgir II
- IV. Ahmad shah

Codes:

- (A) I, III, IV, II
- (B) II, I, IV, III
- (C) III, I, II, IV
- (D) IV, II, III, I

24. The sultana, Gulabi and Kali Champa varieties in different regions of India are varieties of which of the following major fruits?

- (A) Custard apple
- (B) Orange
- (C) Guava
- (D) Grapes

25. Who was the chief justice of India when public interest litigation was introduced in the Indian judicial system?

- (A) M. Hidayatullah
- (B) A.M. Ahmedi
- (C) P.N. Bhagwati ✓

(D) A.S. Anand

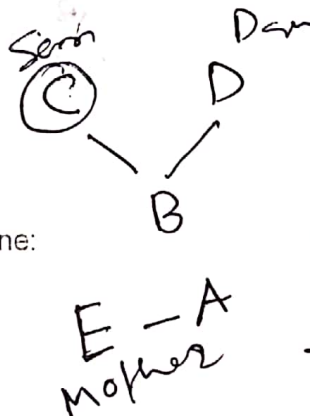
26. On a construction site, men, women and children are working in the ratio of 9:4:1. Their wages are in the ratio of 8:5:3. If 60 women are working on this site, then total daily wages of all person is Rupees 2850. Daily wages of a child is equal to -

- (A) Rupees 7
(B) Rupees 5
(C) Rupees 8
(D) Rupees 6

$$\frac{60}{2850} = \frac{15 \times 60 \times 4}{A}$$
$$135:60:15$$
$$\frac{8x}{15x}$$

27. Mr. A meets Mr. B. (B) is the father of a son C and a daughter D. E is the mother of A. C is married and has one son. (E) is the daughter-in-law of B. how is A related to B?

- (A) Son
(B) Uncle
(C) Nephew
(D) Grandson



$$135 \times 8x + 60 \times 5x$$
$$1080x + 300x$$
$$1380x = 2850$$
$$x = 2$$
$$1080 \times 2 = 2160$$
$$300 \times 2 = 600$$
$$2160 + 600 = 2760$$

28. Pick out the odd one:

- (A) MpOn
(B) AdCb
(C) SvUt
(D) VxYw

29. Select the related word/letters from the given alternatives:

ACEG : IKMO :: QSUW : ?

- (A) YZCE
(B) YACD
(C) YACE
(D) YBCE

30. A certain sum of money was divided between A, B and C in the ratio 5:6:9. If A received Rs. 450 the sum divided was

- (A) 2000
(B) 1800
(C) 2250
(D) 1000

$$\frac{5}{20} \times 450 \times 2 = 450$$
$$\frac{450 \times 20}{90} = 100$$
$$1800$$

31. BEI : NTA :: IRB : ?

- (A) JPW
(B) PCR

$$\frac{450}{540} = \frac{810}{1800}$$

- (C) MYL
(D) SJE

32. Find the next number in the sequence: 30, 45, 90, 225, 675

- (A) 1890
(B) 1745
(C) 1845
(D) 2362.5

$$\begin{array}{r} 2 \overline{) 30} \\ 15 \end{array}$$

$$\begin{array}{r} 3 \overline{) 45} \\ 15 \end{array}$$

$$\begin{array}{r} 6 \overline{) 90} \\ 30 \end{array}$$

$$\begin{array}{r} 15 \overline{) 225} \\ 150 \\ 75 \end{array}$$

$$\begin{array}{r} 45 \overline{) 675} \\ 450 \\ 225 \end{array}$$

33. Find the answer of the following:

$7 + 3 = 421$

$11 + 7 = 477$

$9 + 5 = 445$

$6 + 2 = ?$

- (A) 444
(B) 412
(C) 475
(D) 487

34. The average salary of male employees in a firm was Rs. 5200 and that of females was Rs. 4200. The mean salary of all the employees was Rs. 5000. What is the % of female employees?

- (A) 80%
(B) 20%
(C) 40%
(D) 30%

$$\frac{5200x + 4200y}{x + y} = 5000$$

$$52x + 42y = 50x + 50y$$

$$2x = 8y$$

$$x = 4y$$

$$\frac{4250}{2.5} = 1700$$

$$\frac{40}{.555 + .020}$$

35. Find the value of

$$\frac{(.555 \times .555 - .555 \times .020 + .020 \times .020)}{(.555 \times .555 \times .555) + (.020 \times .020)}$$

- (A) 1.55
(B) 1.74
(C) 2.36
(D) 5.02

$$.555 = x$$

$$.020 = y$$

$$\frac{x^2 - xy + y^2}{x^3 + y^3}$$

$$\frac{x+y}{y} = 5$$

36. Age of mother 10 years ago was 3 times the age of her son. After 10 years, mother's age will be twice that of his son. Find the ratio of their present ages.

- (A) 11 : 7

$$\frac{1}{x+y}$$

$$6(x+y)(x^2 - xy + y^2)$$

$$x^3 - x^2y + xy^2 - xy^2$$

- (B) 9 : 5
(C) 7 : 4
(D) 7 : 3

37. Father is 3 times more aged than his daughter. If after 5 years, he would be 3 times of daughter's age, then further after 5 years, how many times he would be of his daughter's age?

- (A) 1 $\frac{1}{2}$ times
(B) 2 times
(C) 2.5 times ✓
(D) 3 times

$$\begin{aligned} x &= \text{dan} \\ y &= F \\ 3x &= y \end{aligned}$$

$$\begin{aligned} 3(x+5) &= (y+5) \\ 3x+15 &= y+5 \\ 3x-y &= -10 \end{aligned}$$

38. A watch gain 8 seconds in 4 minutes and was set right at 4 AM. What time will it show at 11 PM on the same day?

- (A) 11:08
(B) 12:38
(C) 11:38 ✓
(D) 12:08

$$\begin{array}{r} 24 \times 60 \times 12 \\ 2 \end{array}$$

$$\begin{aligned} 8+11.5 &= 3(x+y) = (y+10) \\ 19 \times 60 &= 3x - y = 10 \\ 285 &= 3x - y \\ 288 &= 3x - y \end{aligned}$$

39. A clock loses 5 minutes every hour and was set right at 11 AM on a Monday. When will it show the correct time again?

- (A) 11 AM on Sunday ✓
(B) 11 AM on Monday
(C) 11 AM on Tuesday
(D) 11 AM on Wednesday


$$\begin{aligned} 12 - 1 &= 11 \\ 12 \times 24 &= 288 \end{aligned}$$

$$\begin{aligned} 24 \times 60 \times 12 &= 288 \\ 288 &= 288 \end{aligned}$$

40. My watch, which gains uniformly, is 2 min and show at noon on Sunday, and is 4 min 48 seconds fast at 2 PM on the following Sunday when was it correct?

- (A) Wednesday noon
(B) Sunday 2 PM
(C) Monday noon
(D) Tuesday 2 PM

$$24 \times 60$$



$$\begin{aligned} 12 \times 12 &= 144 \\ 144 &= 144 \end{aligned}$$

Instruction for Question No. (41-43):

Six friends are sitting in a circle facing inwards.

1. Priti and Ashwini are exactly opposite to each other.
2. Sachin is in between Priti and Dipen.
3. Dipen is immediately to the left of Ashwini.
4. Rishi is not exactly opposite to Dipen.

$$y - 60 = 10$$

B22/

$$\begin{aligned} x &= \text{sum} \\ y &= \text{another} \\ (y-10) &= 3(x-10) \end{aligned}$$

$$\begin{aligned} y-10 &= 3x-30 \\ y-3x &= -20 \\ y-2x &= 10 \\ -x &= -30 \end{aligned}$$

$$y+10 = 2(x+10)$$

$$\begin{aligned} y+10 &= 2x+20 \\ y-2x &= 10 \\ x &= 20 \end{aligned}$$

41. Who are the neighbors of Dipen?

- (A) Rishi and Rupesh
- ☒ (B) Ashwini and Sachin
- (C) Priti and Sachin
- (D) None of these

42. Who is sitting opposite to Dipen?

- (A) Rupesh
- (B) Ashwini
- ☒ (C) Sachin
- (D) Rishi

43. Who is just right to Ashwini?

- ☒ (A) Rishi
- (B) Sachin
- (C) Ashwini
- (D) Rupesh

44. Pick out the odd one-

- ☒ (A) Spade
- ☒ (B) Shovel
- ☒ (C) Trowel
- (D) Weeder

45. In a certain language, if SUNSHINE is coded as TVOTIJOF then how will MOON be coded:

- (A). NPPQ
- ☒ (B). NPPO
- (C). PPON
- (D). NQQP

46. In a certain language,

- (I) 'hu(ma sam)' means 'Water is life'.
- (II) 'sam na zo' means 'Glass of water'.
- (III) 'chi(zo ma)' means 'life of PI'.


Which of the following represents 'PI' in that language?

- (A). hu
- (B). ma
- ☒ (C). chi
- (D). sam

47. Mary is walking towards South-West for 15 miles, turns right and walks another 10 miles. She then turns 90° Clockwise and walks 10 miles. Now, she again

B22/

8



turns left and walks 30 miles. Which direction is she facing?

- (A) East
- (B) West
- (C) South-East
- (D) North-West

48. There are six persons Ashwin, Kiran, Komal, Dipen, Esha and Mittal. Komal is the sister of Mittal. Kiran is the brother of Esha's husband. Dipen is the father of Ashwin and grandfather of Mittal. There are two fathers, three brothers and a mother in the group. Who is the mother?

- (A) Ashwin
- (B) Kiran
- (C) Komal
- (D) Esha

49. There are five friends - Satish, Kishor, Mohan, Anil and Rajesh. Mohan is the tallest. Satish is shorter than Kishor but taller than Rajesh. Anil is little shorter than Kishore but little taller than Satish. Who is taller than Rajesh but shorter than Anil?

- (A) Anil
- (B) Kishor
- (C) Rajesh
- (D) Satish

50. If 'green' means 'red', 'red' means 'yellow', 'yellow' means 'blue', 'blue' means 'orange', 'orange' means 'black', then the colour of sky will be -

- (A) Yellow
- (B) Red
- (C) Orange
- (D) Green

51. Which of the following program is launched to provide multilingual exposure to students in Indian Language?

- (A) Bhasha Gyaan
- (B) Bhasha Samagam
- (C) Bhasha Dhan
- (D) Bhasha Sangam

52. What are required for good teaching?

- I Diagnosis
- II Remedy
- III Direction
- IV Feedback

Select the correct answer from the codes given below :

- (A) I, II, III and IV

- (B) I and II
- (C) II, III and IV
- (D) III and IV

53. NMEICT stands for :

- (A) National Mission on Education through ICT
- (B) National Mission on E-governance through ICT
- (C) National Mission on E-commerce through ICT
- (D) National Mission on E-learning through ICT

54. Which of the following is Doordarshan's Educational Television Channel?

- (A) Gurukul
- (B) Gyan Bharati
- (C) Gyan Darshan
- (D) Vidya

55. Which one of the following is the most important elements in teaching?

- (A) Relationship between teachers and students ✓
- (B) Subject matter
- (C) Teaching techniques and aids used
- (D) Student's knowledge

56. The concept of 'SUPW' was elucidated by?

- (A) Adiseshiah Committee
- (B) Ishwar Bhai Patel Review Committee
- (C) Ramamurthi Committee
- (D) Sampurnanand Committee

57. Which of the following apex institution involved in the planned and coordinated development of the teacher education system in the country?

- (A) UGC
- (B) NCERT
- (C) NCTE
- (D) NAAC

58. What is the use of text book in a class?

- (A) To achieve learning objectives ✓
- (B) To delimit what is to be taught
- (C) To explain ideas and concepts
- (D) Set new standards

59. Why is teacher training necessary?

- (A) Increase teaching skills
- (B) Understand methods of school organisation
- (C) Upgrade knowledge of content
- (D) All the above ✓

60. 10+2+3 year structure of education was proposed by?

- (A) Education Commission, 1964
- (B) Ramamurti Committee, 1990
- (C) Secondary Education Commission, 1952
- (D) University Education Commission, 1948

61. 'National Policy on Education' 1986 was reviewed by?

- (A) Adlasehiah Committee
- (B) Iswar Bhai Patel Committee
- (C) Ramamurti Committee
- (D) Sampurnanand Committee

62. Which of the following state undertook the innovative project 'Lok Jumbish
People's movement for Education for All'?

- (A) Bihar
- (B) Madhya Pradesh
- (C) Rajasthan
- (D) Uttar Pradesh

63. Which of the following policies was introduced in 1975?

- (A) Curriculum for the 10 year school
- (B) Kothari Commission Report
- (C) National policy on education
- (D) Radhakrishnan Report

64. The purpose of the textbook is to provide-

- (A) A learning material based on a syllabus to a learner
- (B) A material to teachers to base teaching on
- (C) A material forming the basis and content for examinations
- (D) Reading and reference materials for the teachers

65. The aim of the Charter Act of 1813 was ?

- (A) Government control on education
- (B) To make English education common
- (C) To spend money on education
- (D) To spread education worldwide

66. NLM stands for

- (A) National Literacy Mission
- (B) National Labour Mission
- (C) National Liberty Mission
- (D) National Literacy Movement

67. What is Teaching Aptitude?

- (A) Possession of requisite abilities to be a teacher

- (B) Devotion towards the profession
- (C) The desire to excel as a teacher
- (D) None of the above

68. Which out of the following is a better teacher?
- (A) The one strictly following the disciplinary guidelines
 - (B) The one devoting full time to the school
 - (C) The one who is interested in overall development of students
 - (D) The one who develops leadership in his students
69. Learning would be meaningful when it is centered.
- (A) Curriculum
 - (B) Society
 - (C) Student
 - (D) Teacher
70. What is the use of homework?
- (A) Helps in preparing next chapter before coming to school
 - (B) Helps in memorising the previous lessons
 - (C) Provide students an opportunity to implement what they have learnt
 - (D) To catch up with other students
71. What is the name of Yashpal Committee Report (1993)?
- (A) I.C.T. in teacher education
 - (B) Learning through broadcasting
 - (C) Learning without burden
 - (D) None of the above
72. Navodaya Schools have been established to—
- (A) Increase number of school in rural areas
 - (B) Provide good education in rural areas
 - (C) Complete "sarva shiksha abhiyan"
 - (D) Check wastage of education in rural areas
73. When the students become failed, it can be understood that—
- (A) The system has failed
 - (B) The teachers failure
 - (C) The text-books failure
 - (D) The individual student's failure
74. RTE Act was implemented in India with effect from
- (A) 1st April 2009
 - (B) 1st May 2010
 - (C) 1st April 2008
 - (D) 1st April 2010

75. The National flagship programme of education (SSA) aims at
- (A) Universalization of Elementary Education ✓
 - (B) Universalization of Secondary Education
 - (C) Special Education in Primary Schools
 - (D) Special Secondary Academic Programs

Directions: Choose the word which is almost same in meaning as the word given

76. RESTIVE

- a) Pacific
- b) Restless ✓
- c) Tired
- d) Irresistible

77. GAUNT

- a) Scrawny
- b) Give
- c) Suspicious
- d) Grow

78. FROLIC

- a) Fun
- b) Froth
- c) Play
- d) Proud

79. MOTTLED

- a) Dapper
- b) Dappled
- c) Bottled
- d) Pint

80. NEOPHYTE

- a) Guru
- b) Expert ✓
- c) Parsimony
- d) Fledgling

Directions: Choose the correct pair of homophones to complete each given sentence

81. "She has a very slim It seems feeding her is a"

- a) Waist / waste
- b) Waste / waist
- c) Waist/ waist
- d) Waste / waste

82. "In times we all share our of cake."

- a) Piece/piece
- b) Peace / peace
- c) Piece / peace
- d) Peace / piece

83. "On my to college, I'll visit the doctor and the pros and cons of a surgery."

- a) Weigh / way
 - b) Weigh / whey
 - ☒ c) Way/ weigh
 - d) Whay / whey
84. "My pet cat was playing with the remote with its and accidentally pressed the button."
- a) Pause / pause
 - ☒ b) Paws / pause
 - c) Pause / peas
 - d) Paws / poss
85. "The used to go hunting at"
- a) Nights / knights
 - ☒ b) Knights / nights
 - c) Nights / nights
 - d) Nights / nites

Directions: Complete the following sentences, choosing the most appropriate word from the options given.

86. To her teacher's surprise, as soon as Seema met her new friends she abandoned her typical reticence and adopted a new, _____ personality.
- ☒ a) Garrulous
 - b) Reproachful
 - c) Asinine
 - d) Irascible
87. In order to keep the audience's attention, students were advised to avoid _____ discussion, and to speak only about subjects _____ to their report.
- ☒ a) Brusque / mandatory
 - b) Digressive / tangential
 - c) Irrelevant / germane ✓
 - d) Disinterested / Impartial
88. After being approached by a mendicant in the street, Jolly knew he had ventured beyond the border which circumscribed the _____ part of town.
- a) Pleasant
 - b) Costly
 - ☒ c) Altruistic
 - d) Affluent ✓
89. Toxins released into the town's drinking water have had a _____ effect on the overall health of its inhabitants.
- a) Potent
 - ☒ b) Deleterious ✓
 - c) Innocuous
 - d) Ravenous
90. Rowan gasped at pictures of the _____ living conditions found in third world countries.
- ☒ a) Surreal
 - b) Splendid
 - ☒ c) Squalid ✓
 - d) Impeccable

Directions: fill in the blanks with the correctly spelt word

91. The United Nations Organization was in 1945 with the objective of averting another major world war.

- a) Founded
- b) Funded
- c) Fined
- d) Fond

92. Every nation has customs and traditions.

- a) It's
- b) Its ✓
- c) Its'
- d) Own

93. I will let you do this now but don't take it as a, because I will not let you do it again.

- a) President
- b) Presedent
- c) Precedent ✓
- d) Precident

94. The is survived by his wife and two children

- a) Diseased
- b) Deceased ✓
- c) Decesed
- d) Descesed

95. A sick man needs a room.

- a) Quit
- b) Quite
- c) Quitt
- d) Quiet ✓

96. We should arrive their place time lunch.

- a) In, to, at
- b) At, by, for
- c) At, for, in
- d) At, in, for ✓

97. They live a small one bedroom flat the third floor.

- a) On, on,
- b) In, in
- c) In, on ✓
- d) On, in

98. Parts of the country are sea level

- a) Below ✓
- b) Under
- c) Beneath
- d) Underneath

99. We arrived to get good seats.

- a) On time
- b) Timely
- c) In time ✓
- d) At time

100. She can play all the musical instruments the violin

- a) Beside
- b) Besides
- c) Except
- d) Not

Directions: Complete the idiomatic expressions

101. "Ok everybody, the lunch break is over, now get back to the"

- a) Work
- b) Grind ✓
- c) Mill
- d) Hearth

102. "Did you get that job?" "No dear, I it."

- a) Cracked
- b) Burst
- c) Passed
- d) Blew ✓

103. "..... in there. Things should get better soon."

- a) Hang
- b) Hold
- c) Stay
- d) Stand

104. Writers of his calibre are hard to by

- a) Get
- b) Meet
- c) Come ✓
- d) Stand

105. She was hot under the when she heard that they had lost the

- contract
- a) Coat ✓
- b) Collar
- c) Sleeves
- d) Head

Directions: Fill in the blanks, choosing from the options given

106. In the the author states his intention in writing the book.

- a) Forward
- b) Forword
- c) Foreward
- d) Foreword

107. The museum curator discovered that the Persian vase was a

- a) Forged
- b) Forge
- c) Forgery
- d) Forage

108. We know she is rich so she doesn't have to

- a) Float
- b) Flaunt ✓
- c) Flash
- d) Flout

109. That was a abuse of his authority

- a) Flagrant ✓

- b) Flagrant
- c) Flamboyant
- d) Fragrant

110. The child..... about in the water until the life guard reached him

- a) Floundered
- b) Foundered
- c) Fumbled
- d) Freaked

76. हिंदी के उद्भव का सही अनुक्रम है-

- a) पालि, प्राकृत, अपभ्रंश, हिंदी
- b) प्राकृत, पालि, अपभ्रंश, हिंदी
- c) अपभ्रंश, पालि, प्राकृत, हिंदी
- d) पालि, अपभ्रंश, प्राकृत, हिंदी

77. पश्चिमी हिंदी का विकास अपभ्रंश के किस रूप से हुआ?

- a) शौरसेनी
- b) मागधी
- c) अर्धमागधी
- d) ब्राह्मण

78. हिंदी की कुल कितनी बोलियाँ हैं ?

- a) पंद्रह
- b) सोलह
- c) सत्रह
- d) अठारह

79. निम्नलिखित में से कंठव्य व्यंजन है-

- a) ठ
- b) ग
- c) व
- d) ब

80. "दिल पक जाना इस" मुहावरे का अर्थ है?

- a) कष्ट पहचाना
- b) अत्यंत पीड़ित होना
- c) प्रेम न होना
- d) अच्छा लगाना

81. भाषा की सबसे छोटी इकाई है-
- a) शब्द
 - b) व्यंजन
 - c) स्वर
 - d) वर्ण / ध्वनि
82. हिंदी में वर्णों की संख्या कितनी है?
- a) 50
 - b) 51
 - c) 52
 - d) 53
83. अनुनासिक का संबंध होता है?
- a) केवल नाक से
 - b) केवल मुँह से
 - c) नाक और मुँह दोनों से
 - d) इनमें से कोई नहीं
84. हिंदी वर्णमाला में व्यंजनों की संख्या है-
- a) 32
 - b) 34
 - c) 33
 - d) 36
85. 'रेलगाड़ी' शब्द है-
- a) तत्सम
 - b) तद्भव
 - c) देशज
 - d) संकर
86. 'सम्मुख' में उपसर्ग है-
- a) सम
 - b) समा
 - c) सम्
 - d) स
87. निम्न में से किस शब्द में 'ई' अथवा 'इन' प्रत्यय नहीं है-
- a) आर्थी

- b) पंडिताइन
c) हस्ती
d) रोगी
88. रचना की दृष्टि से वाक्य कितने प्रकार के होते हैं-
a) दो
b) तीन
c) चार
d) पांच
89. निम्न में से ह्रस्व स्वर कौन सा है-
a) क. अ. प, आ
b) आ, ई, उ, ऊ,
c) अ, इ, उ, ऋ
d) आ, ई, ऊ, ॠ
90. निम्न विकल्पों में से एक वाक्य सही है, सही वाक्य का चयन कीजिए-
a) एक किलो आलुओं को लाओ
b) एक किलो आलू लाओ
c) एक किलो आलुए लाओ
d) उपयुक्त सभी
91. दो वर्णों के होने वाले विकार को कहते हैं-
a) उपसर्ग
b) समास
c) संधि
d) प्रत्यय
92. गायक का सही संधि विच्छेद है-
a) गा + अक
b) गै + अक
c) गे + अक
d) गौ + अक
93. "जो धन कमाते हो उसमें से थोड़ा अवश्य बचाना चाहिए" में वाक्य का प्रकार पहचानिये-
a) विधिवाचक
b) विस्मयवाचक

- c) प्रश्नवाचक
 d) इच्छावाचक
 94. 'नीलकमल' में उत्तर पद कमल है।
 a) विशेष्य
 b) विशेषण
 c) विशेष्य- विशेषण
 d) इनमें से कोई नहीं
 95. हिंदी किस भाषा परिवार की भाषा है-
 a) द्रविड़
 b) अस्ट्रिक
 c) भारोपीय
 d) चीनी
 96. वर्तमान हिंदी का प्रचलित रूप है -
 a) अवधि
 b) खड़ी बोली
 c) ब्रज भाषा
 d) देवनागरी
 97. अविकारी शब्द होते हैं-
 a) संज्ञा
 b) सर्वनाम
 c) विशेषण
 d) अव्यय
 98. कौन सा शब्द भाववाचक संज्ञा नहीं है-
 a) मिठाई
 b) चतुराई
 c) लड़ाई
 d) उतराई
 99. स्थावर का विलोम शब्द है-
 a) सचल
 b) चंचल
 c) चेतन
 B22/

d) जंगम

100. गर्व का पर्यायवाची है-

a) गर्भ

b) दर्प

c) गँवार

d) गम्भीर

101. निम्न में से कौन सा एक युग्म विपरीतार्थक नहीं है-

a) कर्म- अकर्म

b) कर्कश- मधुर

c) कटु- अप्रिय

d) कठिन- सरल

102. शांत रस का स्थाई भाव क्या है-

a) उत्साह

b) जुगुप्सा

c) विस्मय

d) निर्वेद

103. छंद के प्रत्येक चरण में 16 मात्राएँ होती हैं। यह सममात्रिक छंद है। प्रथम और दूसरे

चरणों में तुक समान होते हैं -

a) दोहा

b) चौपाई

c) सोरठ

d) उल्लाला

104. वसुधा का पर्यायवाची शब्द है-

a) पृथ्वी

b) सुधा

c) सूर्य

d) वसुदेव

105. चूहे के चाम से नगाड़े नहीं मढ़े जाते लोकोक्ति का क्या अर्थ है-

a) कंजूसी करना

b) सीमित साधनों से काम चलाना

c) छोटे होकर बड़ा काम करना

B22/

- d) सीमित साधनों से बड़े काम नहीं होते
106. निम्न में से सारंग शब्द का अनेकार्थी शब्द है-
- a) कोयल
b) चातक
c) काक
d) खंजन
107. छंद की हर पंक्ति को चरण या कहा जाता है-
- a) पाद
b) गति
c) यति
d) गण
108. 'जिसका कभी अंत नहीं होता' के लिए एक शब्द लिखिए -
- a) आदि
b) अनंत
c) अनादि
d) अननंत
109. हिंदी भाषा में कितने प्रकार के उपसर्ग हैं-
- a) एक
b) दो
c) तीन
d) चार
110. तन का पर्यायवाची शब्द है-
- a) शरीर
b) झील
c) चंद्रमा
d) खटिया